

以下の I maj7のスケールとアボイドを記せ。

例

Cmaj7




問題

Amaj7




E<sup>b</sup>maj7



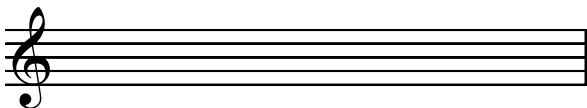
A<sup>b</sup>maj7




E<sup>b</sup>maj7



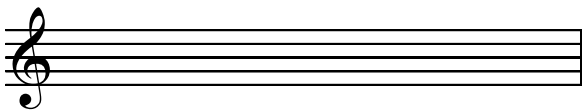
Gmaj7



Dmaj7



Bmaj7



B<sup>b</sup>maj7

