

Q: 以下の○7のミクソリディアンb2b6とアボイドを記せ。

解答

例

D7




↑ Avoid

問題

E7




B7




G7




A^b7




B^b7



F[#]7



D^b7



F7

