

Q1: 以下のOm7b5のロクリアンとアボイドを記せ。

問題

例

F#m7b5

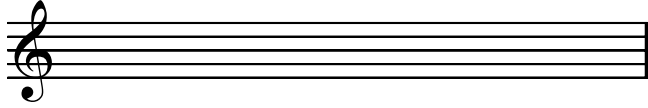


↑ Avoid


↑ Avoid

問題

Em7b5




Bm7b5



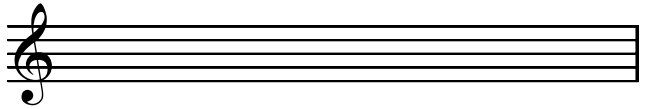
Dm7b5




G#m7b5



Gm7b5



C#m7b5



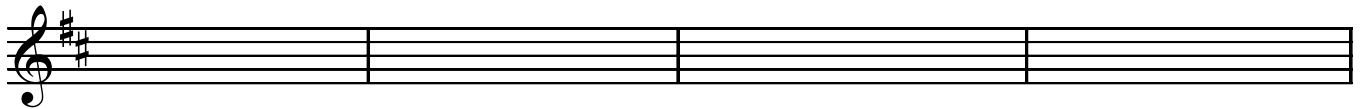
Q2: 以下のコード進行でOm7b5のスケールを書き出せ。

Dmaj7

Em7

Gmaj7

G#m7b5



A7

Bm7

C#m7b5

F#7

