

Q1: 以下のO7のミクソリディアンとアボイドを記せ。

問題

例

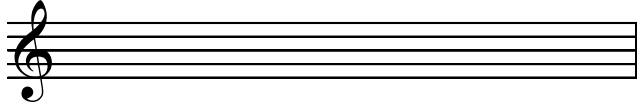
D7




↑ Avoid

問題

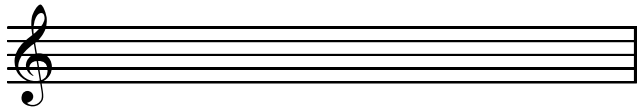
E7




B7




G7




A \flat 7



B \flat 7



F \sharp 7



Q2: 以下のコード進行でV 7を判別しミクソリディアンを記せ。

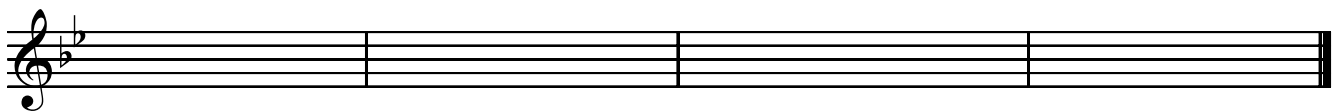
Q:2-1

G7

Cm7

F7

Dm7



Q:2-2

Gmaj7

A7

F \sharp m7

B7

