


Work Sheet2 : 以下のコードに対応する度数を記せ。

D \flat 7

Fmaj7

Em7 \flat 5

B \flat 7




(例) II \flat 7

B7

A7

Dm7

D \flat 7




G7

E \flat 7

Am7 \flat 5

Em7 \flat 5



F7

Bm7

Dmaj7

A \sharp dim




Cm7

F7

Gm7 \flat 5

B \flat 7



D7

G7

G \sharp m7

Cmaj7

